



**ROOKIE
LIFEGUARD**



**WATER SAFETY
ACTIVITY
BOOKLET**

THREE


WATER SAFETY SEARCH



Y	F	T	M	T	N	U	B	K	C	R	C	Z	Y	E
C	Z	L	P	R	O	R	G	Y	E	Z	A	Y	T	Z
N	U	A	A	M	I	W	I	S	T	Q	R	X	S	N
E	K	E	I	G	X	X	P	E	K	E	E	O	O	J
G	L	Q	A	D	T	O	C	A	U	S	F	I	R	Z
R	P	D	E	L	N	N	H	U	T	F	U	A	F	W
E	E	S	M	S	A	K	E	O	C	H	L	L	S	R
M	P	N	I	L	O	G	F	M	C	Z	Z	O	V	Y
E	Z	B	U	C	U	L	K	D	P	S	S	Q	O	O
F	L	B	K	U	M	R	N	E	C	I	V	D	A	E
E	M	Y	T	I	N	U	M	M	O	C	U	D	N	T
A	B	U	O	Y	A	N	C	Y	J	A	O	Q	T	G
F	I	R	E	F	W	L	T	J	V	Q	G	V	E	Q
V	D	F	W	G	J	Y	M	I	T	I	U	A	A	V
Z	X	I	G	S	A	G	S	Z	M	M	M	H	S	K

ADVICE	EQUIPMENT
AID	FIRE
AMBULANCE	FROSTY
BRIGADE	LEARN
BUOYANCY	RESPONSIBLE
CAREFUL	SAFETY
COMMUNITY	TOWPATH
EMERGENCY	

WATER FIT



5 Letters

- Float
- Learn
- Water

6 Letters

- Advice
- Frosty
- Hazard
- Notice
- Police
- Safety

7 Letters

- Bicycle
- Careful
- Explore
- Leisure
- Towpath
- Walking
- Weather

8 Letters


- Accident
- Cautious
- Identify

9 Letters

- Accompany
- Ambulance

ROCKS IN THE WATER



	2					2			
1					2				1
		2	2				3		
2									
							0		
					2				
		2	2						
					2	3	2		
1	1		0					2	

Is it safe?

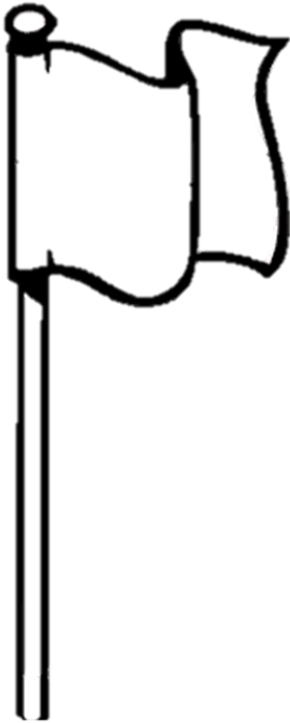
Each number in the grid indicates the number of rocks in its adjacent squares. No rock can be horizontally, vertically and not rock can appear in the same square as a number.

Can you work out where all the rocks are? We've placed one to get you started!


WHICH FLAG?



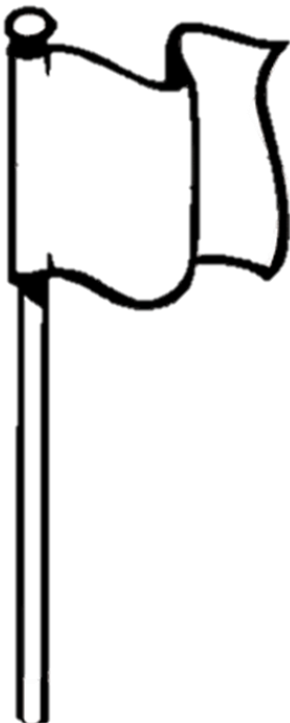
Can you colour in the flags so they show the correct colours for each situation.



There is danger so no swimming is allow



Between these flags is the safest place to swim



These flags show that non-swimming activities such as surfing and wind surfing will be taking place

